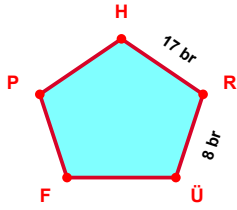
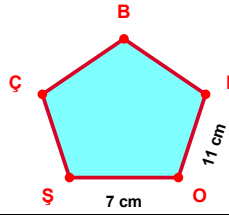


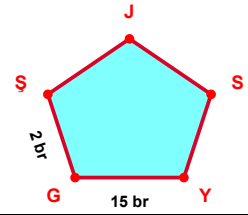
SORU: Aşağıdaki şekillerde verilen, kenar uzunlukları farklarını bulunuz.



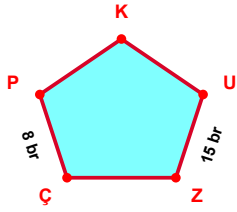
$$|RH| - |ÜR| = \dots\dots\dots$$



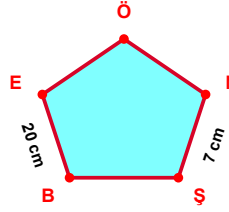
$$|OE| - |ŞO| = \dots\dots\dots$$



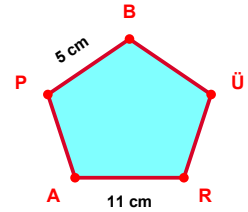
$$|GY| - |ŞG| = \dots\dots\dots$$



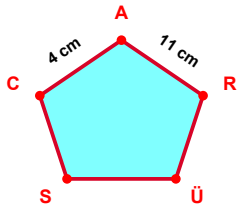
$$|ZU| - |PÇ| = \dots\dots\dots$$



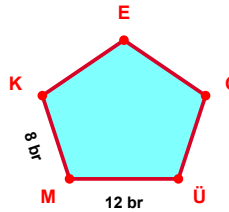
$$|EB| - |ŞN| = \dots\dots\dots$$



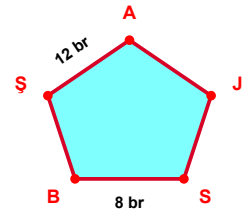
$$|AR| - |BP| = \dots\dots\dots$$



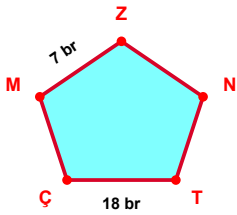
$$|RA| - |AC| = \dots\dots\dots$$



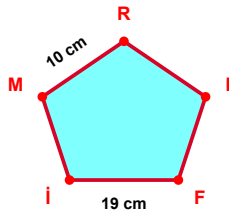
$$|MÜ| - |KM| = \dots\dots\dots$$



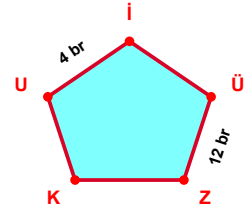
$$|AS| - |BS| = \dots\dots\dots$$



$$|ÇT| - |ZM| = \dots\dots\dots$$

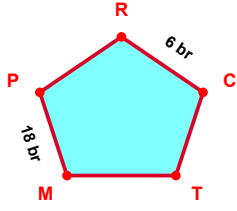


$$|İF| - |RM| = \dots\dots\dots$$

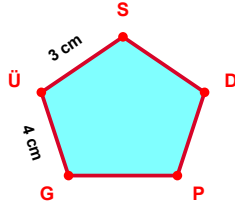


$$|ZÜ| - |İÜ| = \dots\dots\dots$$

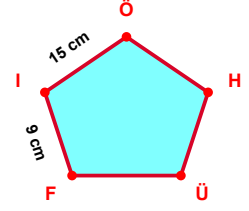
SORU: Aşağıdaki şekillerde verilen, kenar uzunlukları farklarını bulunuz.



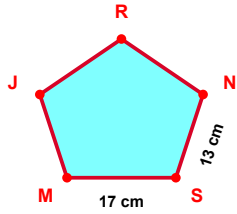
$$|PM| - |CR| = \dots\dots\dots$$



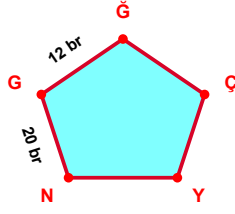
$$|ÜG| - |SÜ| = \dots\dots\dots$$



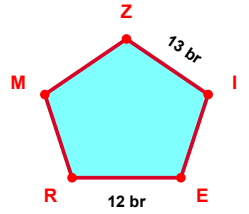
$$|ÖI| - |IF| = \dots\dots\dots$$



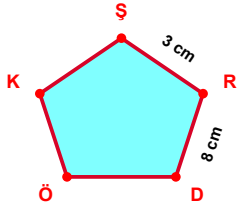
$$|MS| - |SN| = \dots\dots\dots$$



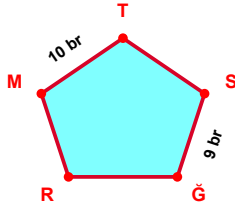
$$|GN| - |ĞG| = \dots\dots\dots$$



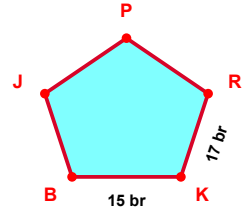
$$|IZ| - |RE| = \dots\dots\dots$$



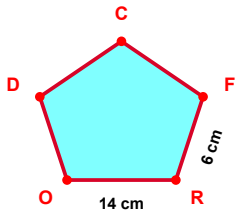
$$|DR| - |RŞ| = \dots\dots\dots$$



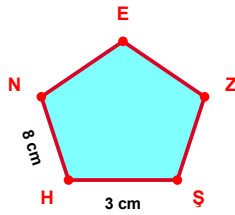
$$|TM| - |ĞS| = \dots\dots\dots$$



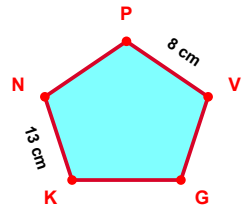
$$|KR| - |BK| = \dots\dots\dots$$



$$|OR| - |RF| = \dots\dots\dots$$



$$|NH| - |HŞ| = \dots\dots\dots$$



$$|NK| - |VP| = \dots\dots\dots$$

SÜREÇ ODAKLI DEĞERLENDİRME ÖLÇEĞİ

Doğru Sayısı: / 24

Öğretmen ilgili kutucuğu işaretler.

Geliştirilmeli (0-8)

İyi (9-14)

Çok İyi (15-20)

Mükemmel (21-24)

☐
☐
☐
☐

Hazırlayan:

Bu bölüme sınıfınızın ilgili kazanıma yönelik genel durumuna ilişkin gözlem ve izlenimlerinizi, öğrencilerinizin bu kazanımla ilgili öğrenme eksikliklerini ve bu eksikliklerin giderilmesi amacıyla yaptığınız/yapmayı planladığınız faaliyetleri not edebilirsiniz.

No	Adı - Soyadı	Toplam Puan	Değerlendirme
1			
2			
3			
4			
5			
6			
7			
8			
9			
10			
11			
12			
13			
14			
15			
16			
17			
18			
19			
20			
21			
22			
23			
24			
25			
26			
27			
28			
29			
30			
31			
32			
33			
34			
35			

Hazırlayan: